
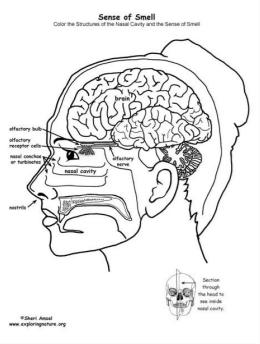


I'm not robot  reCAPTCHA

[Continue](#)



Name: _____ Date: _____

The Skeletal System

Directions: Label the human skeleton with the words from the box.

mandible
 cranium
 vertebrae
 shoulder joint
 ribs
 sternum
 clavicle
 scapula
 pelvis
 tibia
 fibula
 coccyx
 femur
 patella
 radius
 ulna
 humerus
 carpals
 metacarpals
 phalanges
 tarsals
 metatarsals
 elbow joint
 hip joint

© Product of www.KBteachers.com



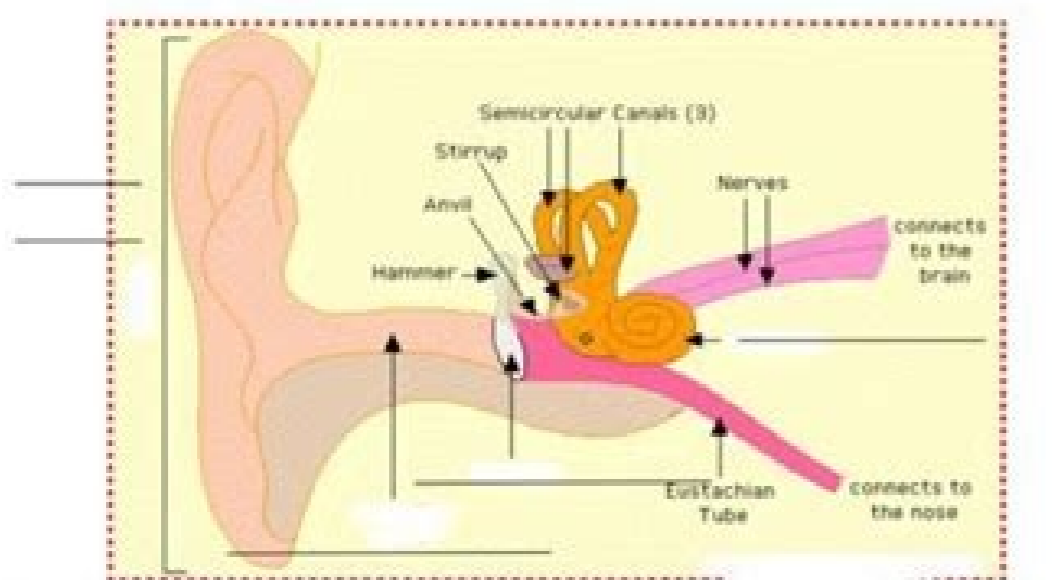
Ear Parts

Time Started: _____
 Time Finished: _____

Parts of the Ear. Match column A with column B.

- | | | | |
|----------|------------|----|---|
| _____ 1. | inner ear | a. | It collects sounds and is at the outer ear area. |
| _____ 2. | pinna | b. | Made up of the pinna and ear canal. |
| _____ 3. | eardrum | c. | It is made up of the ear drum. |
| _____ 4. | outer ear | d. | It sends a message to our brain to tell us about the sounds that we hear. |
| _____ 5. | cochlea | e. | When sound reaches this part, it shakes or vibrates. It helps sounds reach inner ear. |
| _____ 6. | middle ear | f. | It sends sounds into the middle of the ear. |
| _____ 7. | ear canal | g. | It is made up of the cochlea. |

Write the name of the part on the line provided.



*Image from EnchanterLearning.com Copyright 2010

Name: _____ Date: _____

The Human Body

Directions: Label the body parts using words from the word bank. Answer the questions at the bottom of the page.

Brain
 Lung
 Heart
 Liver
 Stomach
 Small intestine
 Large intestine
 Uterus

Number at least 4 other body parts:

